

Arbeitsblätter: Intervalle bestimmen

Diese Seiten enthalten umfangreiche und systematisch angelegte Arbeitsblätter zum Thema Intervalle. Diese können als Lernzielkontrolle oder einfach nur zur Übung eingesetzt werden.

A : Violschlüssel

B : Bassschlüssel

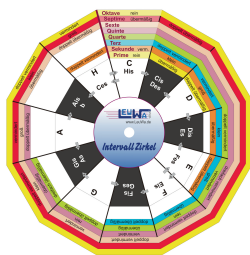
C : Violin- und Bassschlüssel gemischt

Der didaktische Aufbau beginnt mit reinen Intervallen, über die Grobbestimmung zur Feinbestimmung bis zu Intervallen im Violin- und Bassschlüssel gemischt.

Je nach Unterrichtsniveau können so die entsprechenden Arbeitsblätter eingesetzt werden. Eine Übersicht aller Aufgaben ist auf dem Lösungsblatt.

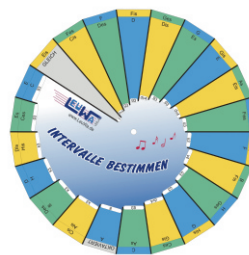
**Diese Kopiervorlagen sind für den Unterricht kostenlos !
Download unter 4teachers.de. Weitergabe erwünscht !**

Tipp zur Lernzielkontrolle für die Schüler:



Intervallzirkel
ISBN: 978-3-940533-06-7

Diese Scheibe hat eine drehbare Klaviertastatur, an der sich die Tonabstände gut erklären lassen.



Intervalle bestimmen - Drehscheibe
ISBN: 978-3-940533-07-4

Mit dieser Scheibe lassen sich alle Intervalle innerhalb einer Oktave einfach ablesen. .

Inhaltsverzeichnis

A: Noten im Violinschlüssel

1. reine Intervalle	Seite	03
2. Grob- und Feinbestimmung ohne Vorzeichen aufwärts	Seite	04
3. Grob- und Feinbestimmung ohne Vorzeichen abwärts	Seite	05
4. Intervalle bestimmen rein, groß, klein	Seite	06 - 07
5. Intervalle bestimmen rein, groß, klein, übermäßig, vermindert	Seite	08 - 10

B: Noten im Basschlüssel

1. reine Intervalle	Seite	11
2. Grob- und Feinbestimmung ohne Vorzeichen aufwärts	Seite	12
3. Grob- und Feinbestimmung ohne Vorzeichen abwärts	Seite	13
4. Intervalle bestimmen rein, groß, klein	Seite	14 - 15
5. Intervalle bestimmen rein, groß, klein, übermäßig, vermindert	Seite	16 - 18

C: Noten im Violin- und Basschlüssel gemischt

1. Intervalle bestimmen gemischt	Seite	19 - 21
---	-------	---------

Lösungen

Seite 22

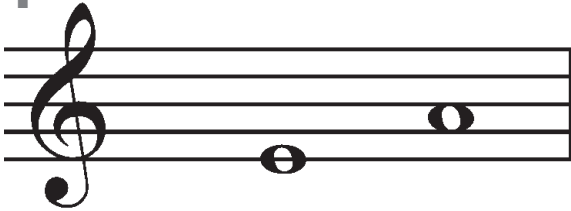
Schreibe unter die Noten die entsprechende **Intervallbezeichnung**

Name _____


Klasse _____

Datum _____

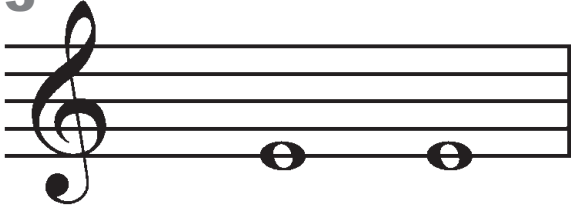
1




2



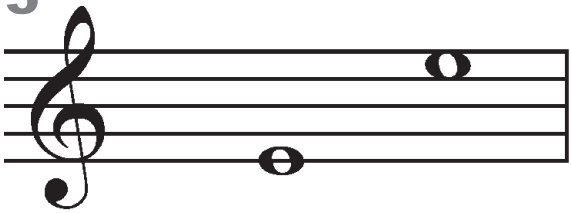
3




4



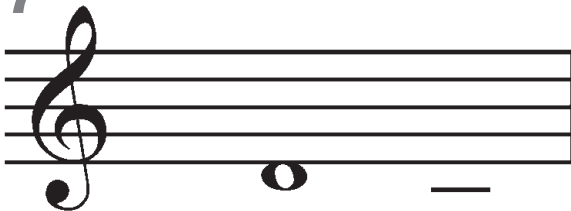
5



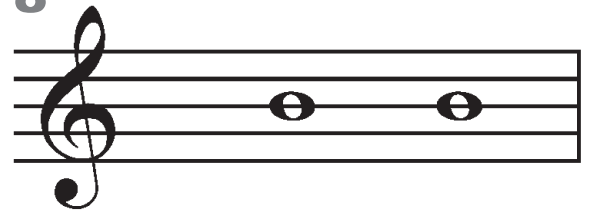
6



7



8



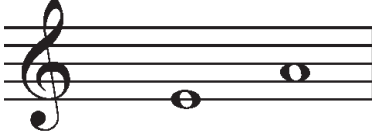
Schreibe unter die Noten die entsprechende **Intervallbezeichnung**

Name _____

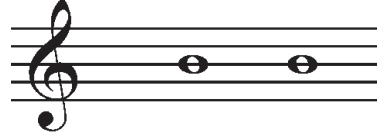
Klasse _____

Datum _____

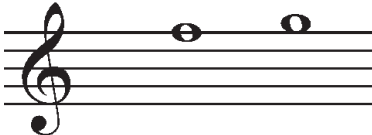
1




2




3



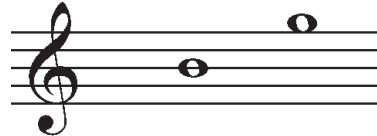
4



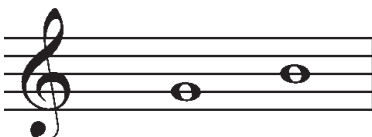
5



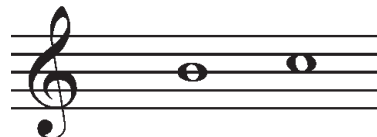
6



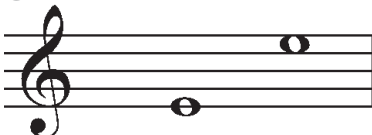
7




8



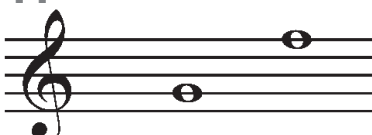
9




10



11



12




Name _____

Schreibe unter die Noten die
entsprechende **Intervallbezeichnung**

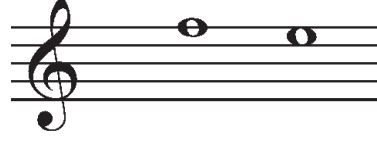
Klasse _____

Datum _____


1




2




3




4




5




6




7




8



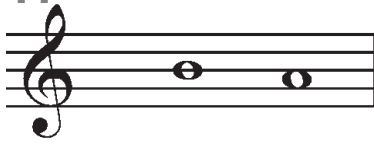
9




10



11

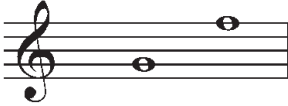


12




Schreibe unter die Noten die
entsprechende **Intervallbezeichnung**

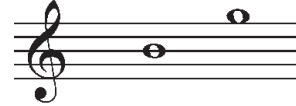
1




2



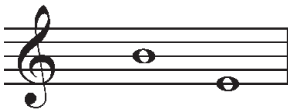
3



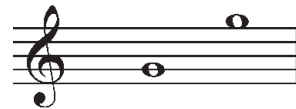
4



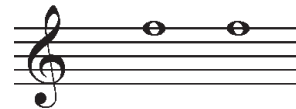
5



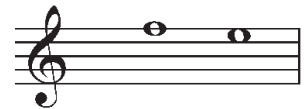
6



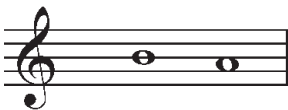
7



8



9



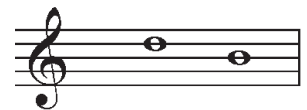
10




11




12



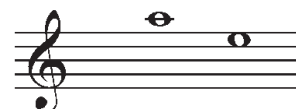
13




14




15




16




17




18



19




20




21




22



23



24



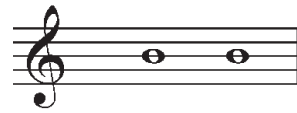
Arbeitsblatt: "Intervalle bestimmen" - Seite 7

Schreibe unter die Noten die
entsprechende **Intervallbezeichnung**


25



26




27




28




29




30



31



32




33



34



35




36




37



38



39



40



41




42




43



44



45



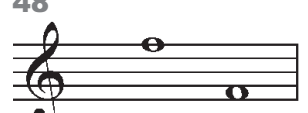
46



47



48




Schreibe unter die Noten die
entsprechende **Intervallbezeichnung**

1



2




3




4



5



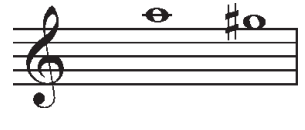
6



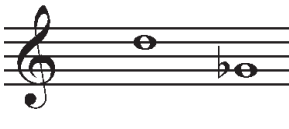
7




8



9



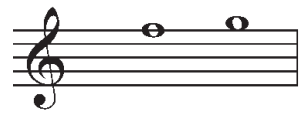
10



11




12




13



14



15



16




17



18



19



20




21



22



23



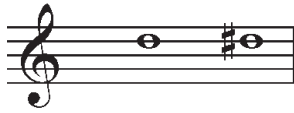
24




Arbeitsblatt: "Intervalle bestimmen" - Seite 9

Schreibe unter die Noten die entsprechende **Intervallbezeichnung**

25




26




27



28




29



30




31



32



33




34



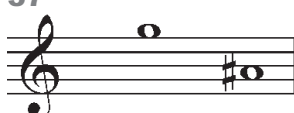
35




36




37



38



39




40



41




42




43




44



45



46



47



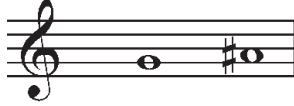
48




Arbeitsblatt: "Intervalle bestimmen" - Seite 10

Schreibe unter die Noten die entsprechende **Intervallbezeichnung**


49



50



51



52



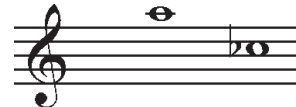
53



54




55



56




57



58




59



60




61



62



63



64



65



66



67



68




69




70



71



72



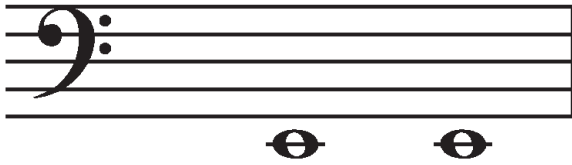
Schreibe unter die Noten die entsprechende **Intervallbezeichnung**

Name _____

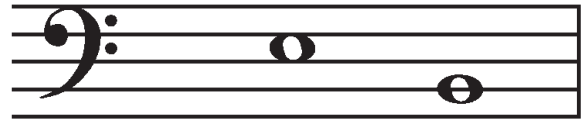
Klasse _____

Datum _____


1




2



3



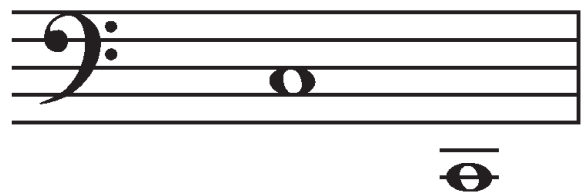
4



5



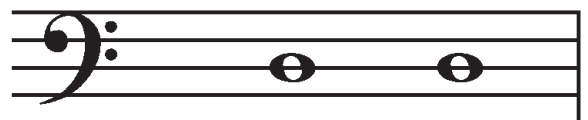
5



7



8




Name _____

Schreibe unter die Noten die
entsprechende **Intervallbezeichnung**


Klasse _____

Datum _____


1




2




3




4




5




6




7




8




9




10



11



12




Name _____

Schreibe unter die Noten die
entsprechende **Intervallbezeichnung**


Klasse _____

Datum _____


1



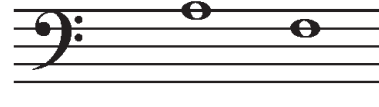
2




3




4




5



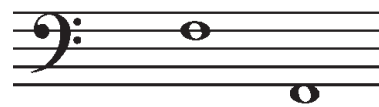
6



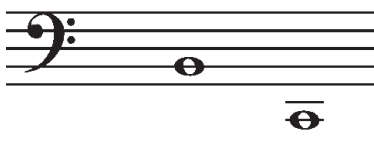
7




8




9



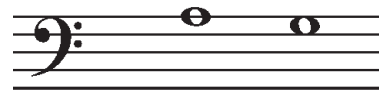
10



11



12



Schreibe unter die Noten die
entsprechende **Intervallbezeichnung**

1



2




3



4



5



6



7




8




9



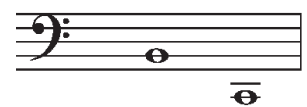
10




11




12



13



14



15




16




17



18




19



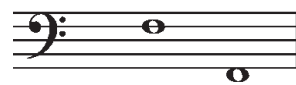
20




21



22



23



24



Schreibe unter die Noten die entsprechende **Intervallbezeichnung**

25

26

27

28

29

30

31

32

33

34

35

36

37

38

39

40

41

42

43

44

45


46

47

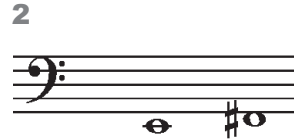
48

Schreibe unter die Noten die
entsprechende **Intervallbezeichnung**


1



2




3



4



5



6



7



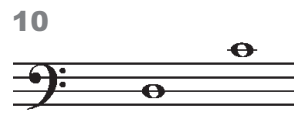
8



9



10



11



12




13




14




15



16



17




18



19



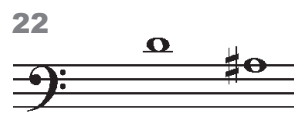
20



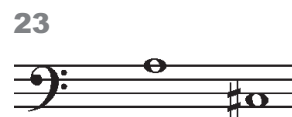
21




22



23



24



Schreibe unter die Noten die entsprechende **Intervallbezeichnung**

25



.....

26



.....

27



.....

28



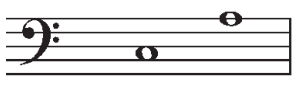
.....

29



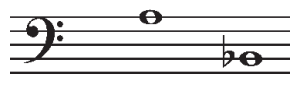
.....

30



.....

31



.....

32




.....

33



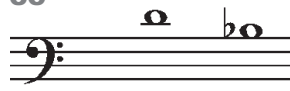
.....

34



.....

35




.....

36



.....

37




.....

38



.....

39



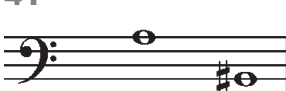
.....

40



.....

41



.....

42



.....

43



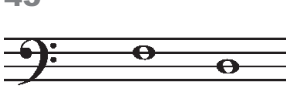
.....

44




.....

45



.....

46




.....

47



.....

48



.....

Schreibe unter die Noten die
entsprechende **Intervallbezeichnung**

49



50



51



52



53



54



55



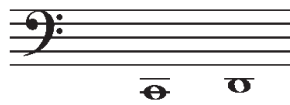
56



57



58



59




60



61



62



63




64



65



66



67



68




69



70



71




72




Schreibe unter die Noten die
entsprechende **Intervallbezeichnung**


1



2




3



4



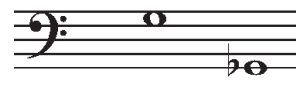
5




6



7




8



9




10




11




12




13




14




15




16



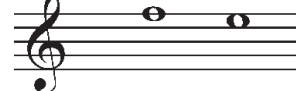
17



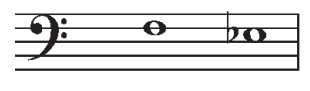
18




19



20




21




22



23



24




Schreibe unter die Noten die entsprechende **Intervallbezeichnung**

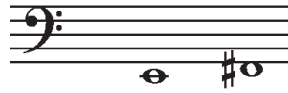
25



26



27



28



29



30



31



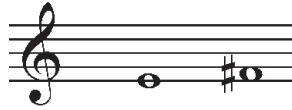
32



33



34



35




36



37



38




39



40




41




42



43



44



45



46



47



48




Arbeitsblatt: "Intervalle bestimmen" - Seite 21

Schreibe unter die Noten die
entsprechende **Intervallbezeichnung**

49



50



51




52



53



54



55



56



57




58



59



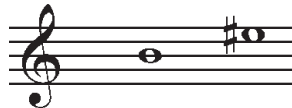
60




61



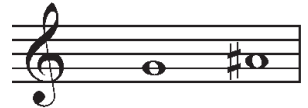
62



63



64



65



66



67



68



69



70



71



72